

Name: _____

Congruent Shapes

Tell whether each pair of shapes is congruent or not congruent.

1.



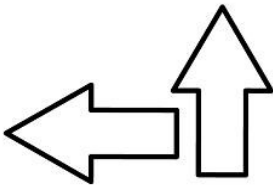
2.



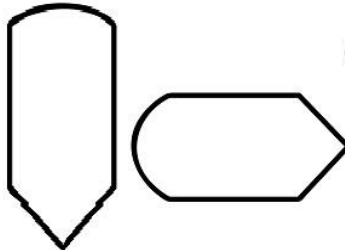
3.



4.



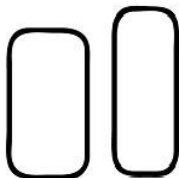
5.




6.



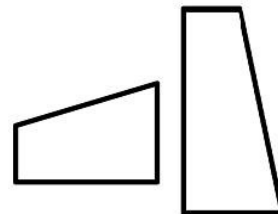
7.



8.



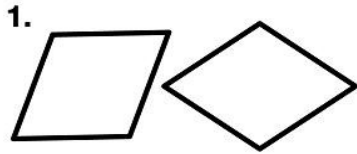
9.



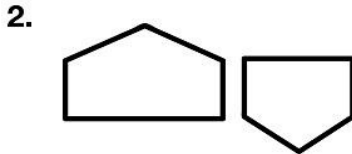
Name: _____

Congruent Shapes - ANSWERS


Tell whether each pair of shapes is congruent or not congruent.



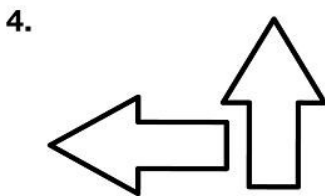
congruent



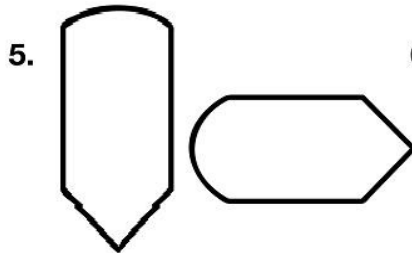
not congruent



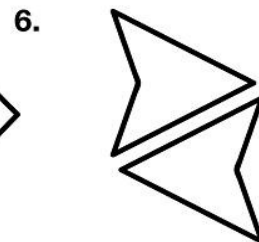
congruent



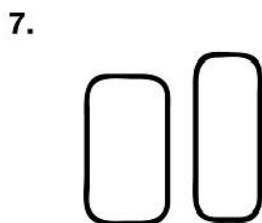
congruent




not congruent



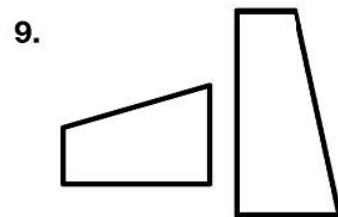
congruent



not congruent



congruent



not congruent