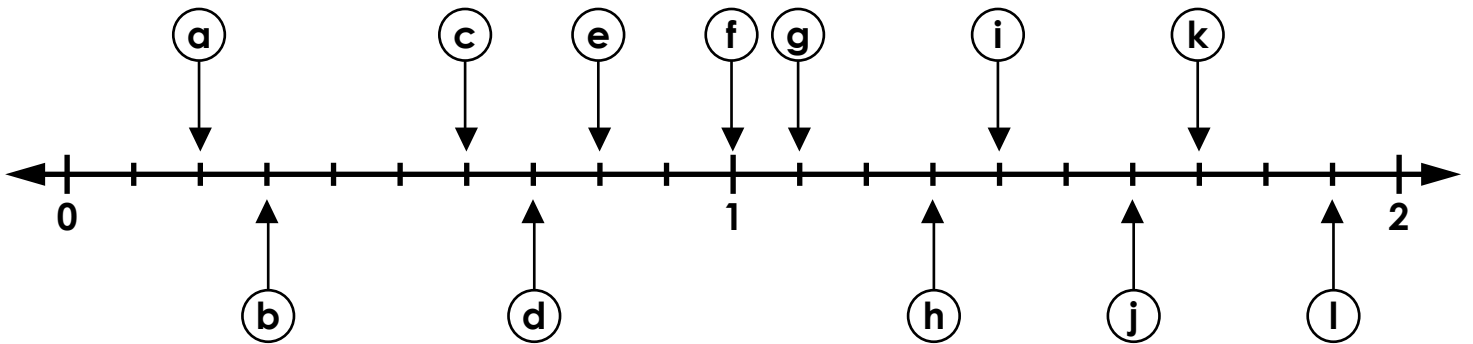


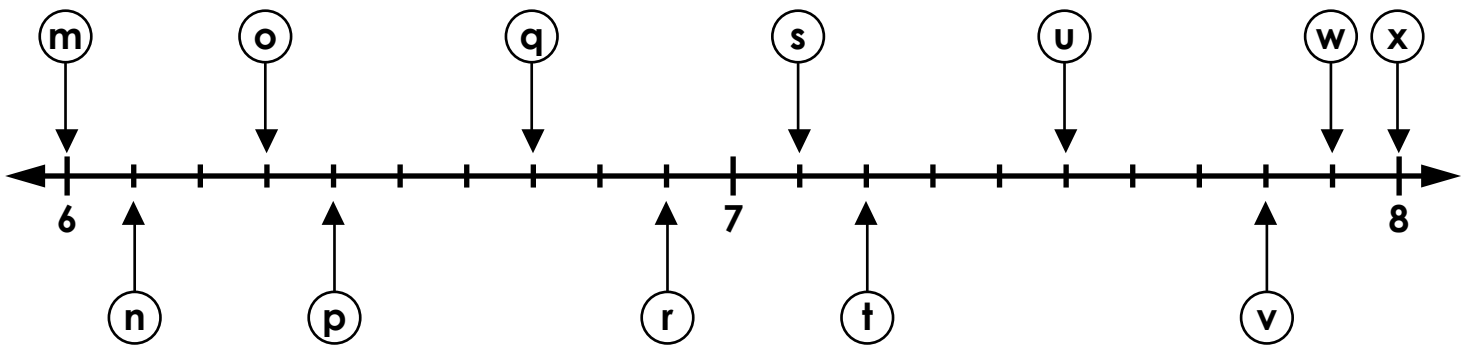
Name: _____

Decimal Number Line

Write the correct decimal on the blank line next to each letter.



- a. 0.2 b. _____ c. _____ d. _____
- e. _____ f. _____ g. _____ h. _____
- i. _____ j. _____ k. _____ l. _____

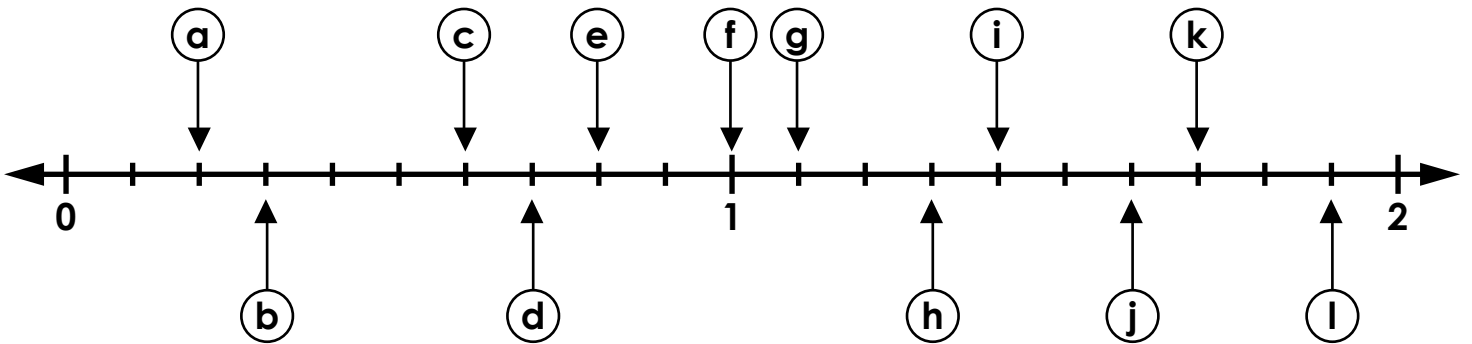


- m. _____ n. _____ o. _____ p. _____
- q. _____ r. _____ s. _____ t. _____
- u. _____ v. _____ w. _____ x. _____

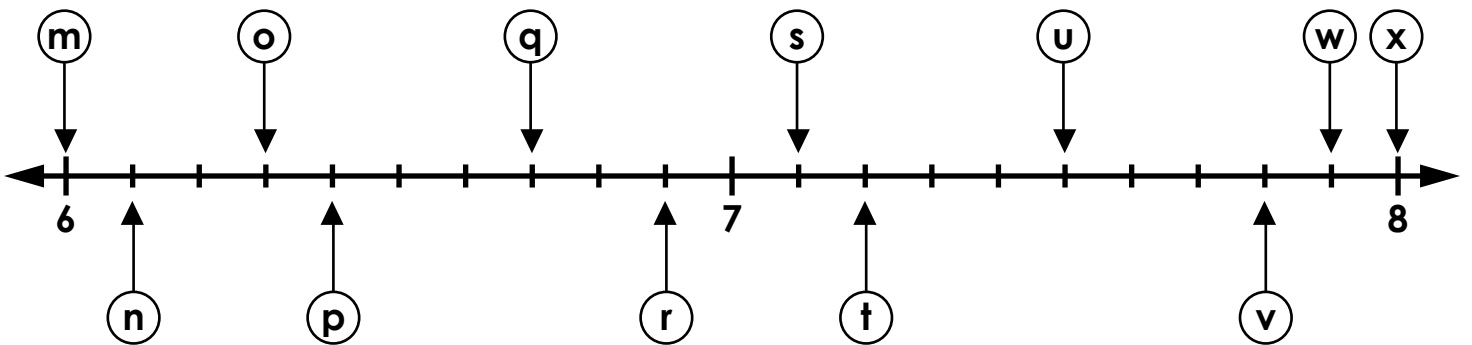
ANSWER KEY

Decimal Number Line

Write the correct decimal on the blank line next to each letter.



a. 0.2 b. 0.3 c. 0.6 d. 0.7
e. 0.8 f. 1.0 g. 1.1 h. 1.3
i. 1.4 j. 1.6 k. 1.7 l. 1.9



m. 6.0 n. 6.1 o. 6.3 p. 6.4
q. 6.7 r. 6.9 s. 7.1 t. 7.2
u. 7.5 v. 7.8 w. 7.9 x. 8.0