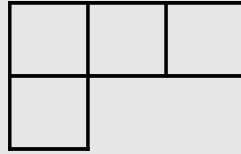


Name: \_\_\_\_\_

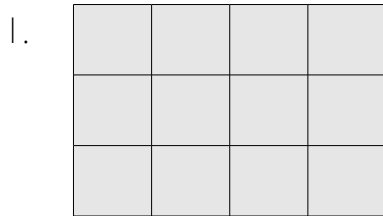
Area – Basic

Area is the number of square units that will fit inside a figure.

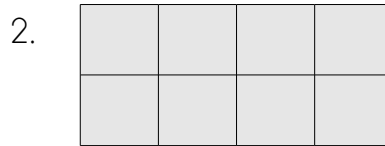
The area of this figure is 4 square units.



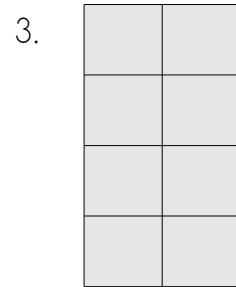
Find the area of each shape. Don't forget to write "square units."



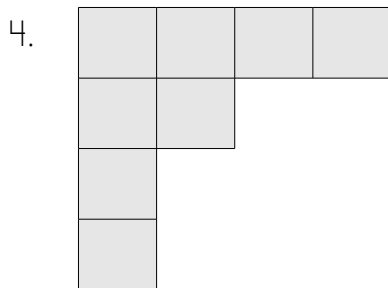
Area = \_\_\_\_\_



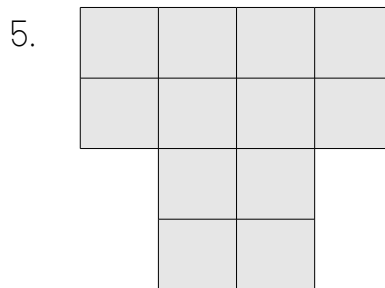
Area = \_\_\_\_\_



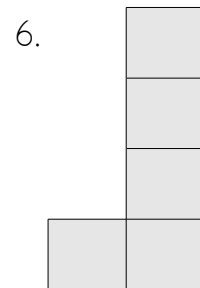
Area = \_\_\_\_\_



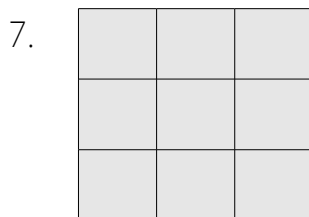
Area = \_\_\_\_\_



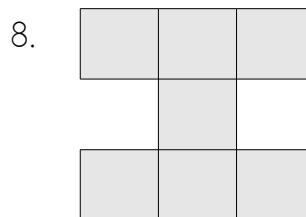
Area = \_\_\_\_\_



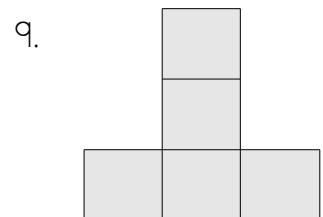
Area = \_\_\_\_\_



Area = \_\_\_\_\_



Area = \_\_\_\_\_



Area = \_\_\_\_\_