





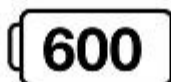
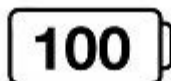







Name: \_\_\_\_\_

Rounding to the nearest hundred

# Rounding Robots

Round the numbers on the robots to the nearest hundred. Draw a line from each robot to the correct battery.



**Rounding Robots**  
**Answer Key**

**746 - 700**

**489 - 500**

**757 - 800**

**550 - 600**

**969 - 1,000**

**74 - 100**

**27 - 0**

**872 - 900**

**252 - 300**

**220 - 200**

**361 - 400**