


Lesson 5.1.2 Resource Page
 Problem 5-16.

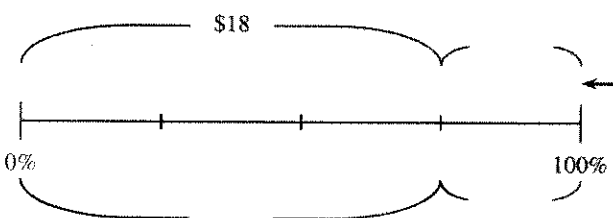
Assume that each number line has been divided into equal parts.

a.



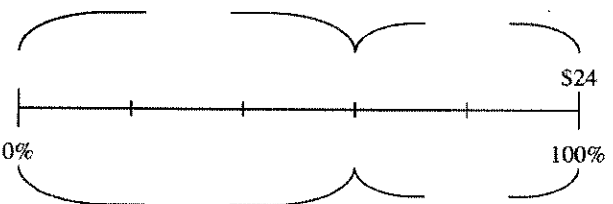
- 20% of 30 is _____
- _____% of 30 is 24
- 10% of 30 is _____

b.



- _____% of _____ is 18
- 50% of _____ is _____
- _____% of _____ is _____

c.



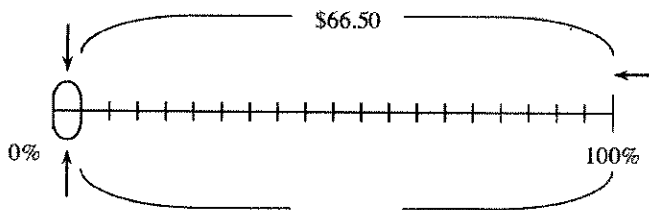
- _____% of 24 is _____
- _____% of 24 is _____

What other statement can be made?

•

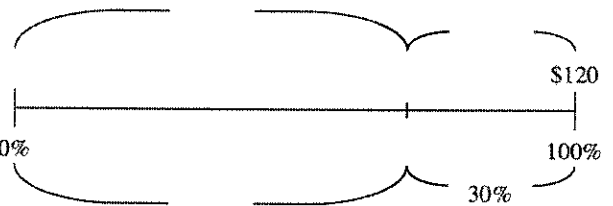
Create three percentage statements.

d.




-
-
-

e.



-
-
-

f.



-
-
-