

# PERCENTAGE COMPOSITION

Name \_\_\_\_\_

Determine the percentage composition of each of the compounds below.




K = \_\_\_\_\_

Mn = \_\_\_\_\_

O = \_\_\_\_\_

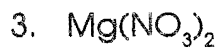
---



H = \_\_\_\_\_

Cl = \_\_\_\_\_

---

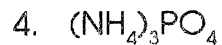


Mg = \_\_\_\_\_

N = \_\_\_\_\_

O = \_\_\_\_\_

---



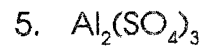
N = \_\_\_\_\_

H = \_\_\_\_\_

P = \_\_\_\_\_

O = \_\_\_\_\_

---



Al = \_\_\_\_\_

S = \_\_\_\_\_

O = \_\_\_\_\_

---